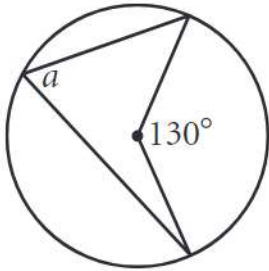
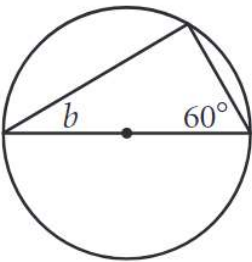


Find the missing measures.

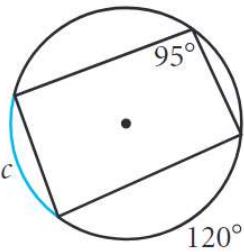
1) $a =$ _____



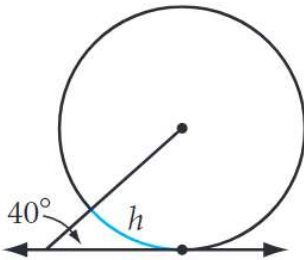
2) $b =$ _____



3) $c =$ _____

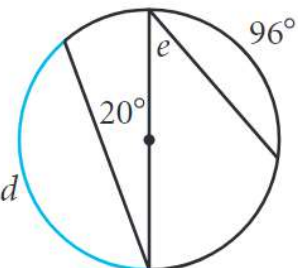


4) $h =$ _____



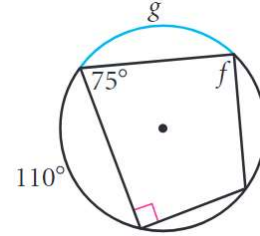
5) $d =$ _____

$e =$ _____



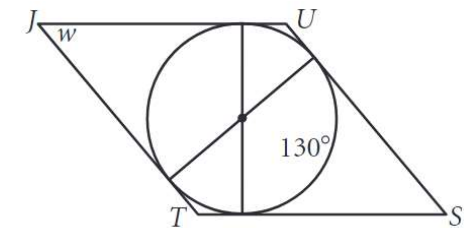
6) $f =$ _____

$g =$ _____



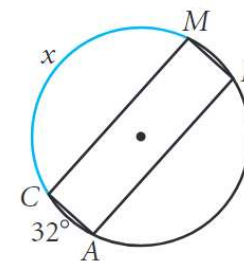
7) $JUST$ is a rhombus.

$w =$ _____



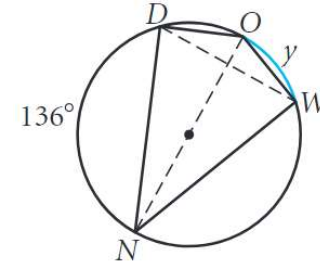
8) $CALM$ is a rectangle.

$x =$ _____

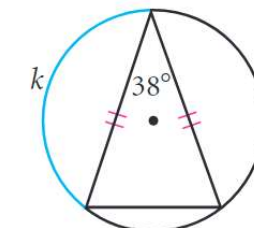


9) $DOWN$ is a kite.

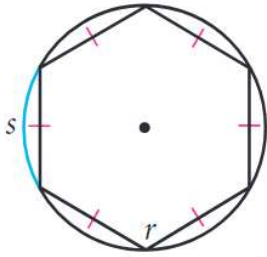
$y =$ _____



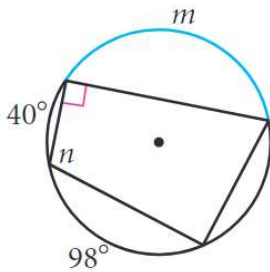
10) $k =$ _____



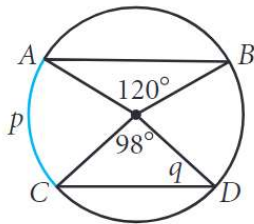
11) $r =$ _____
 $s =$ _____



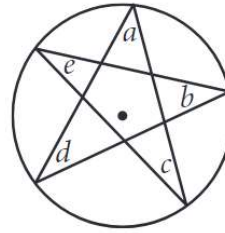
12) $m =$ _____
 $n =$ _____



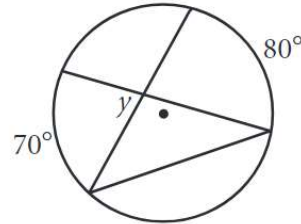
13) $\overline{AB} \parallel \overline{CD}$
 $p =$ _____
 $q =$ _____



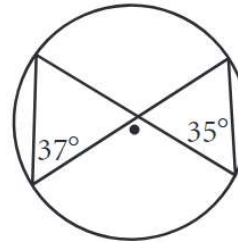
14) What is the sum of $a, b, c, d,$ and e ?



15) $y =$ _____



16) What's wrong with this picture?



17) Find the measure of each lettered angle.

- $a =$ _____
- $b =$ _____
- $c =$ _____
- $d =$ _____
- $e =$ _____
- $f =$ _____
- $g =$ _____
- $h =$ _____
- $l =$ _____
- $m =$ _____
- $n =$ _____
- $p =$ _____

