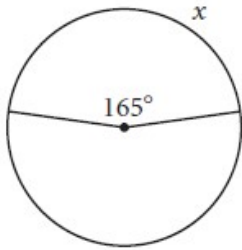
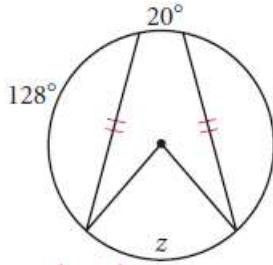


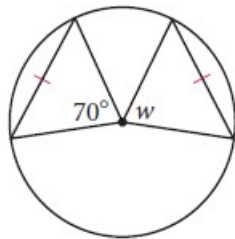
1) $x =$ _____



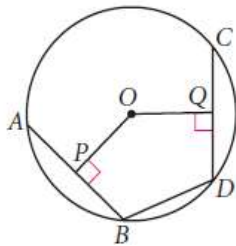
2) $z =$ _____



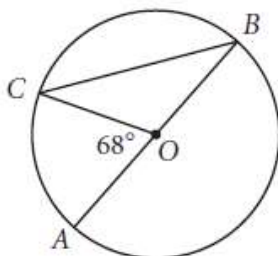
3) $w =$ _____



4) $AB = CD$
 $PO = 8$ cm
 $OQ =$ _____



5) \overline{AB} is a diameter.
 $m\angle B =$ _____
 $m\widehat{AC} =$ _____

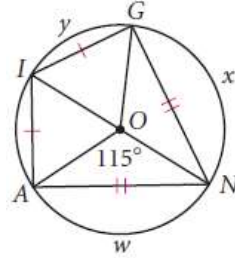


6) $GIAN$ is a kite.

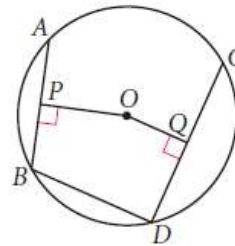
$w =$ _____

$x =$ _____

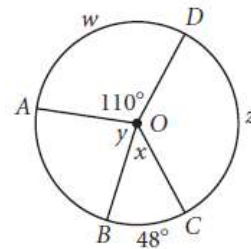
$y =$ _____



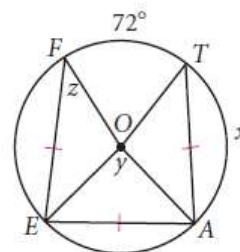
7) $AB = 6$ cm, $OP = 4$ cm, $CD = 8$ cm
 $OQ = 3$ cm, $BD = 6$ cm
 Perimeter of $OPBDQ =$ _____



8) $m\widehat{AC} = 130^\circ$
 $w =$ _____
 $x =$ _____
 $y =$ _____
 $z =$ _____



9) $x =$ _____
 $y =$ _____
 $z =$ _____

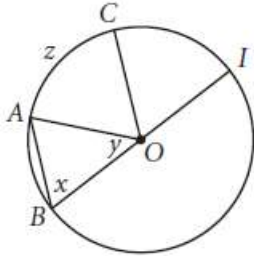


10) $\overline{AB} \parallel \overline{CO}, m\widehat{CI} = 66^\circ$

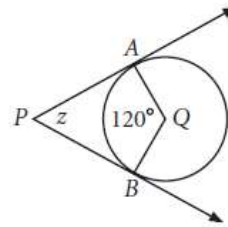
$x =$ _____

$y =$ _____

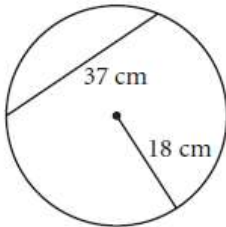
$z =$ _____



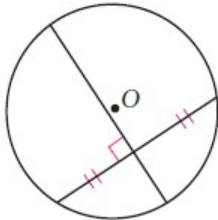
15) $z =$ _____



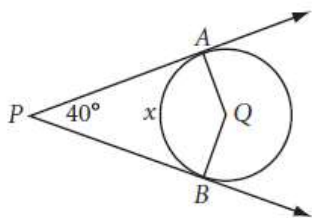
11) What's wrong with this picture?



12) What's wrong with this picture?



13) $x =$ _____



14) $y =$ _____

