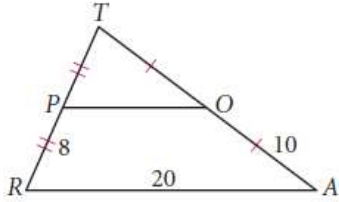
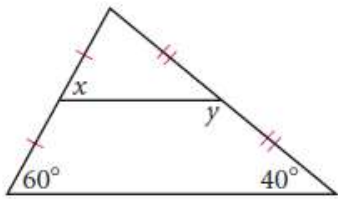


- How many midsegments does a triangle have?
- How many midsegments does a trapezoid have?

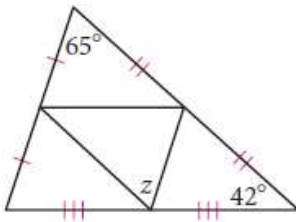
- What is the perimeter of $\triangle TOP$?



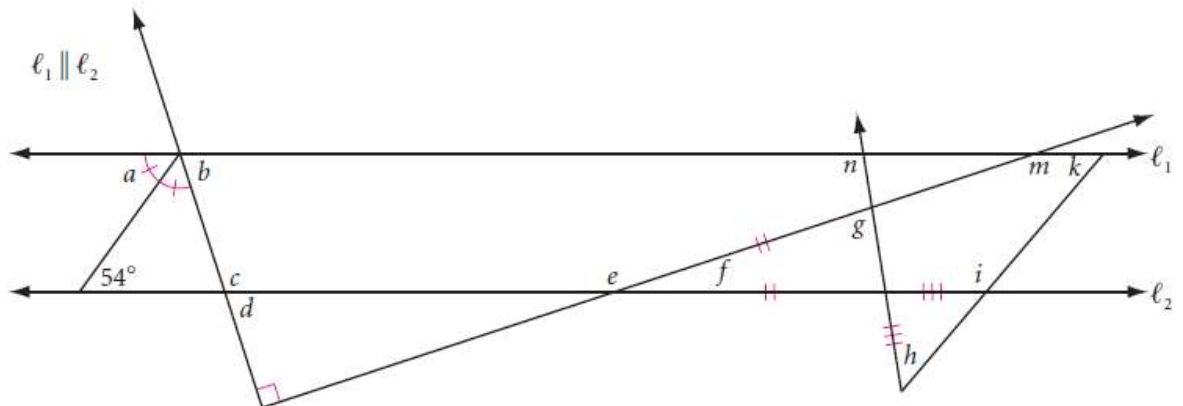
- $x =$ _____
 $y =$ _____



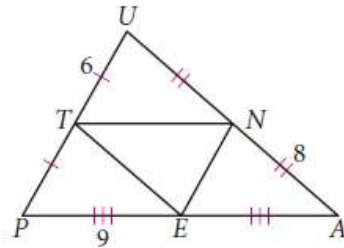
- $z =$ _____



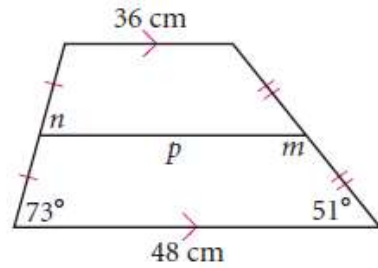
- Calculate the measure of each lettered angle. Explain how you determine the measures h and k .



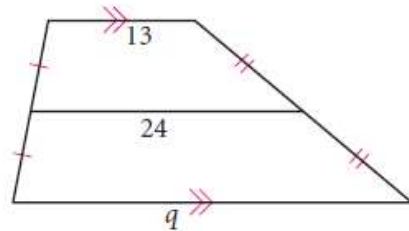
- What is the perimeter of $\triangle TEN$?



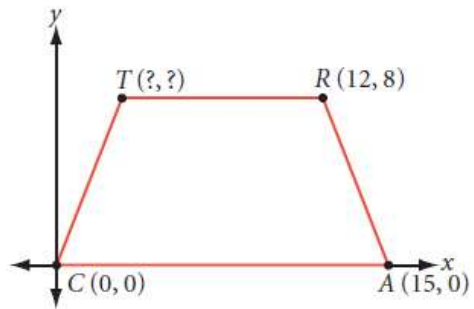
- $m =$ _____
 $n =$ _____
 $p =$ _____



- $q =$ _____



10. $CART$ is an isosceles trapezoid. What are the coordinates of point T ?



11. $HRSE$ is a kite. What are the coordinates of point R ?

