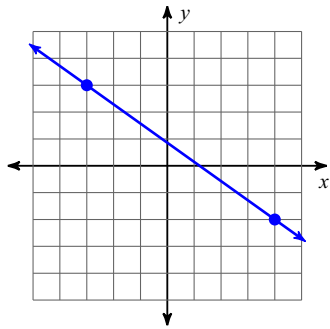


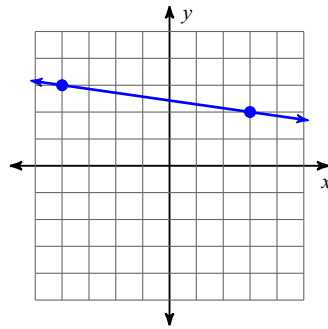
Slope from Graphs

Find the slope of each line.

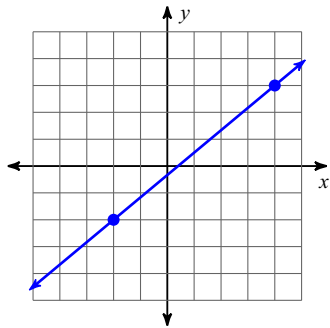
1)



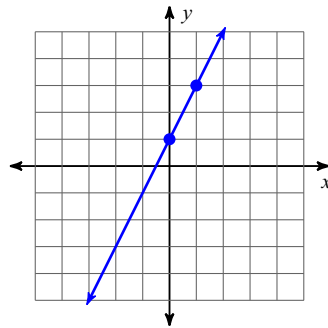
2)



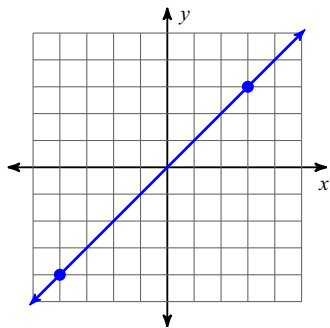
3)



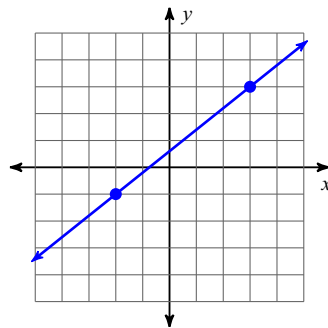
4)



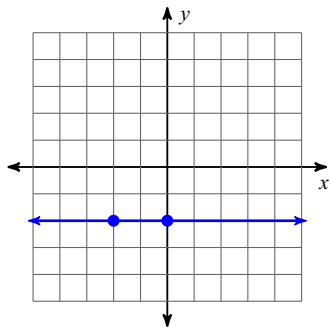
5)



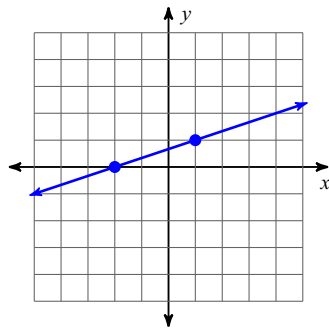
6)



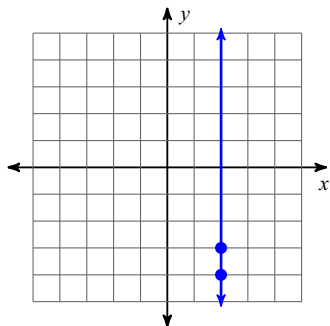
7)



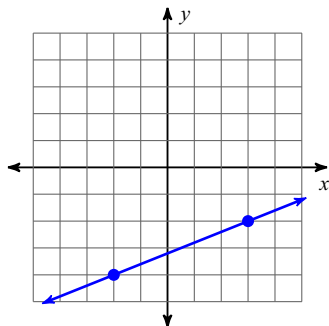
8)



9)



10)



Find the slope of the line through each pair of points.

11) $(-16, -15), (14, -14)$

12) $(-14, -2), (-4, 14)$

13) $(-8, 18), (7, 15)$

14) $(-19, 17), (-1, 17)$

15) $(5, -19), (2, -19)$

16) $(-17, 0), (-19, 4)$

17) $(3, -2), (3, 14)$

18) $(0, -8), (2, 0)$

19) $(9, 3), (17, 0)$

20) $(4, 16), (2, 9)$