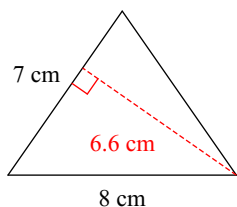


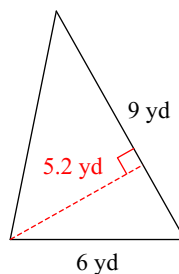
# Area of a Triangle

**Find the area of each.**

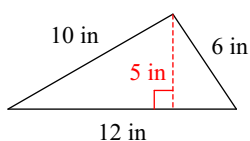
1)



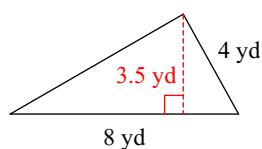
2)



3)

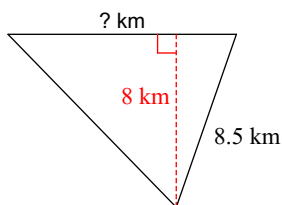


4)



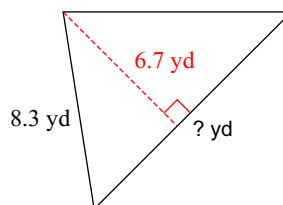
**Find the missing measurement. Round your answer to the nearest tenth.**

5)



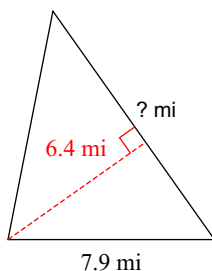
Area = 42.4 km<sup>2</sup>

6)



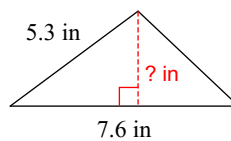
Area = 38.9 yd<sup>2</sup>

7)



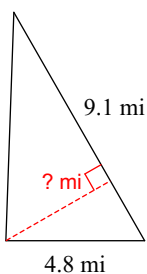
Area = 34.2 mi<sup>2</sup>

8)



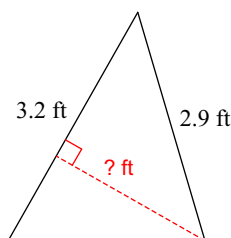
Area = 12.2 in<sup>2</sup>

9)



Area = 19.1 mi<sup>2</sup>

10)



Area = 3.4 ft<sup>2</sup>