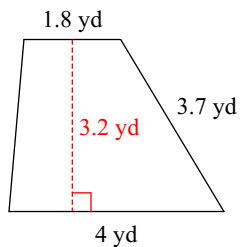


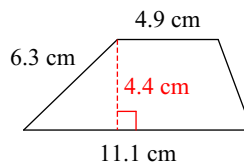
Area of a Trapezoid

Find the area of each.

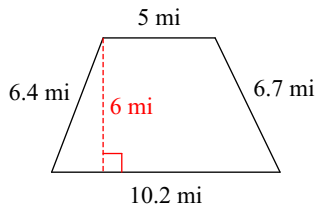
1)



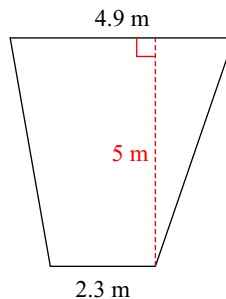
2)



3)

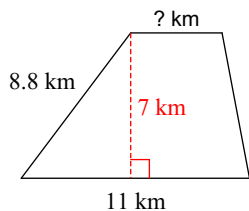


4)



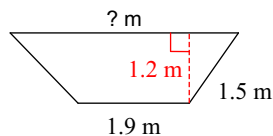
Find the missing measurement. Round your answer to the nearest tenth.

5)



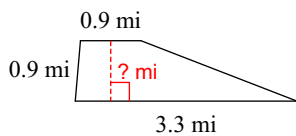
Area = 53.9 km²

6)



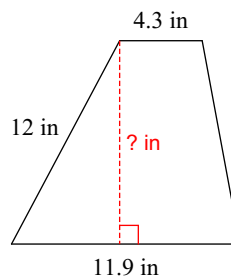
Area = 3.5 m²

7)



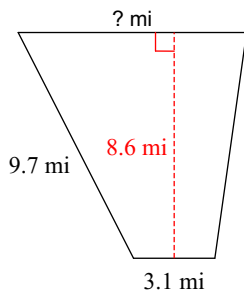
Area = 1.9 mi²

8)



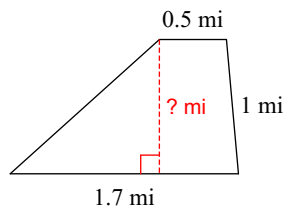
Area = 85.9 in²

9)



Area = 50.7 mi²

10)



Area = 1.1 mi²