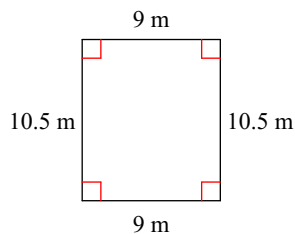


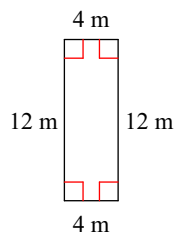
## Area of a Rectangle

Find the area of each.

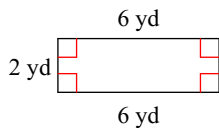
1)



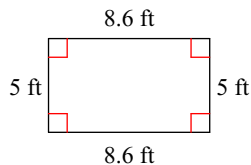
2)



3)

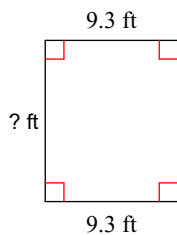


4)



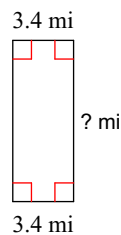
Find the missing measurement. Round your answer to the nearest tenth.

5)



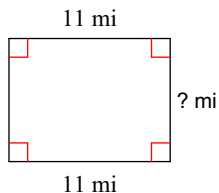
Area = 105.1 ft<sup>2</sup>

6)



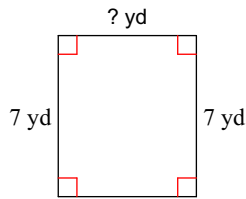
Area = 30.6 mi<sup>2</sup>

7)



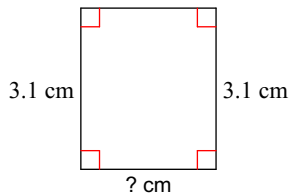
Area = 92.4 mi<sup>2</sup>

8)



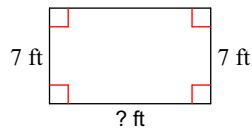
Area = 42 yd<sup>2</sup>

9)



Area = 8.1 cm<sup>2</sup>

10)



Area = 82.6 ft<sup>2</sup>