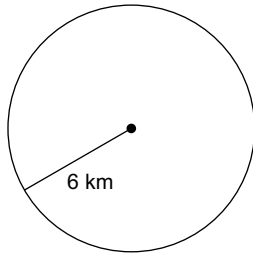


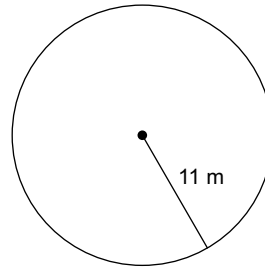
Area of a Circle

Find the area of each.

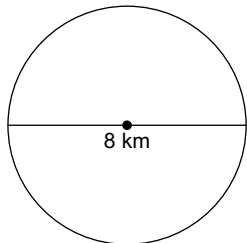
1)



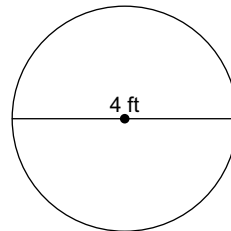
2)



3)



4)



5) radius = 11 in

6) diameter = 18 ft

Find the radius of each circle.

7) area = 81π yd²

8) area = 9π ft²

Find the diameter of each circle.

9) area = 121π m²

10) area = 49π mi²